
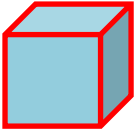

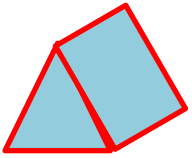


Adı :
Soyadı:

2. Sınıf Matematik

Geometrik Cisimler ve Nesneler

Aşağıdaki şekillerin benzerlerini işaretleyelim.

☐☐☐☐☐☐☐☐☐☐☐☐☐☐☐☐☐☐☐☐☐☐☐☐☐☐☐☐☐☐☐☐☐☐☐☐